




Express each set as a multiplication problem.

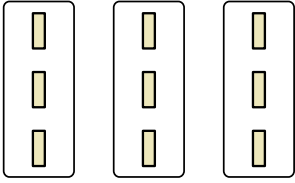
Answers

Ex)




Ex. $3 \times 6 = 18$

1)




1. _____

2)



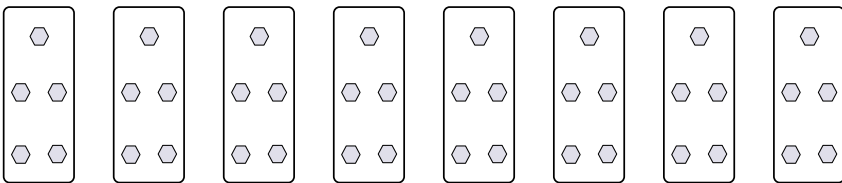
2. _____

3)



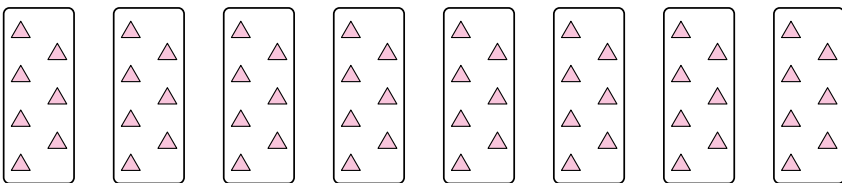
3. _____

4)



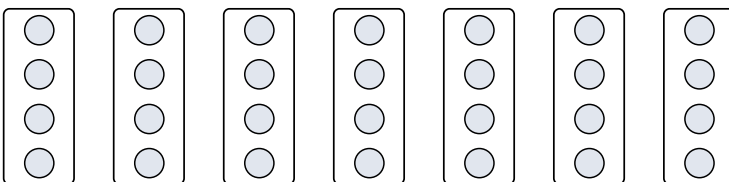
4. _____

5)




5. _____

6)



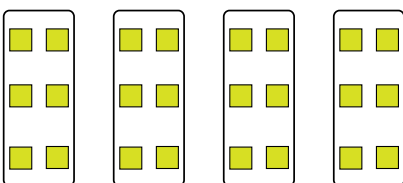
6. _____

7)



7. _____

8)



8. _____



Express each set as a multiplication problem.

Ex)

1)

2)

3)

4)

5)

6)

7)

8)

Answers

Ex. 3×6=18

1. 3×3=9

2. 5×2=10

3. 5×7=35

4. 8×5=40

5. 8×7=56

6. 7×4=28

7. 10×4=40

8. 4×6=24



Express each set as a multiplication problem.

Answers

Ex)

Ex. $3 \times 6 = 18$

1)

1. _____

2. _____

2)

3. _____

4. _____

3)

5. _____

6. _____

4)

7. _____

8. _____

5)

6)

7)

8)